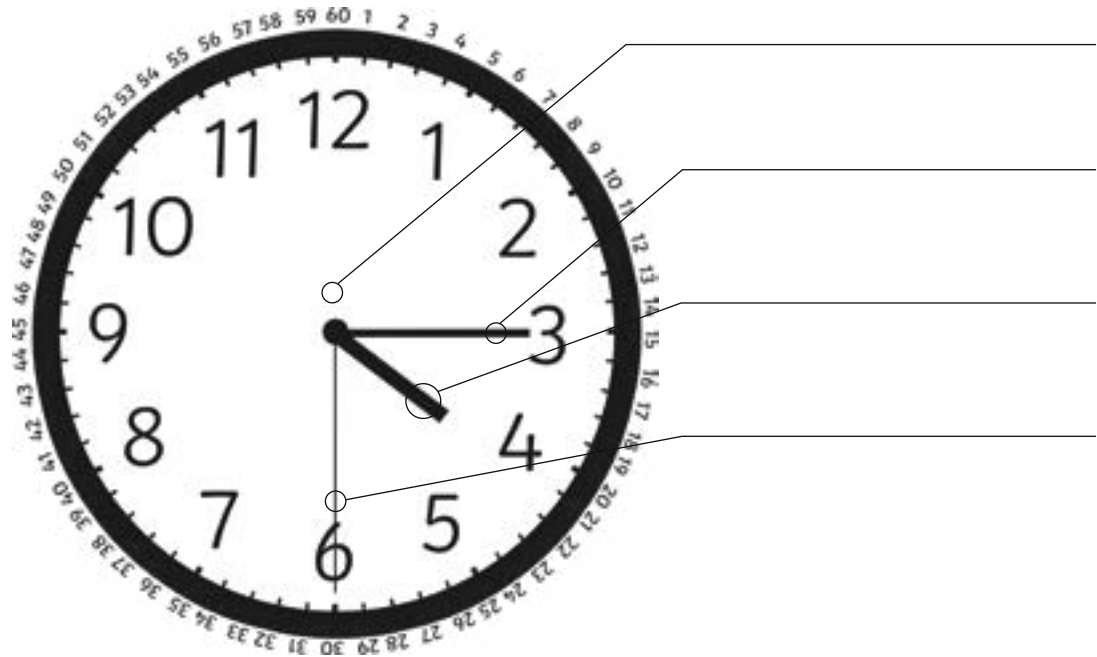


Year 2 Term 2 Time Quiz

1. Label the parts of the clock.



Word bank:


hour hand

second hand

minute hand

clock face

mark




2. a) How many minutes are in an hour?

b) The numbers 1 to 12 are written on the clock. How many minutes are there between each number?



mark



Year 2 Term 2 Time Quiz

3. Draw the minute hand for these times.

a) 4 o'clock



b) half past 4




c) quarter past 4



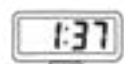




d) quarter to 4




mark



4. Match the times on the analog and digital clocks.



mark

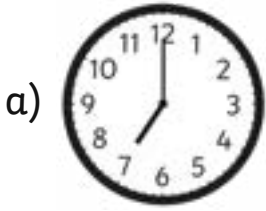


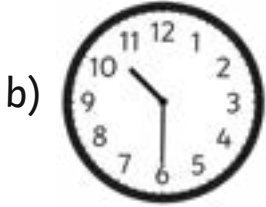
Year 2 Term 2 Time Quiz


Measurement and Geometry


Tell time to the quarter-hour, using the language of 'past' and 'to' (ACMMG039).

5. What time is it?













mark



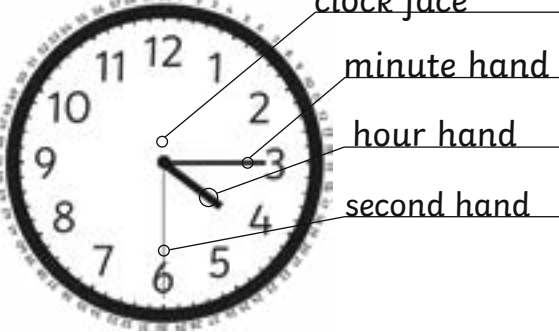




6. Imagine that a friend finds reading a clock challenging.

Write a tip or trick that will help them understand.

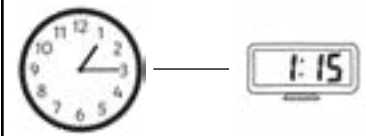
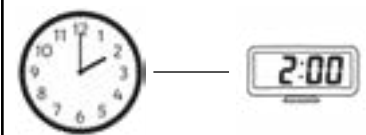
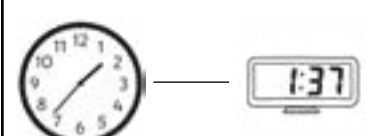


mark



Year 2 Term 2 Time Assessment Answers

Question	Answer	Marks	Notes
1		Award 1 mark for each correct label for a total out of 4 marks.	
2a	60	1 Mark	
2b	5	1 Mark	
3a		1 Mark	
3b		1 Mark	
3c		1 Mark	
3d		1 Mark	

Year 2 Term 2 Time Assessment Answers

Question	Answer	Marks	Notes
4a		1 Mark	
4b		1 Mark	
4c		1 Mark	
4d		1 Mark	
4e		1 Mark	
5a	Seven o'clock	1 Mark	
5b	Half past ten	1 Mark	
5c	Five fifteen	1 Mark	
5d	Six forty five	1 Mark	
5e	One thirty seven	1 Mark	
6	Answers may vary	1 Mark	